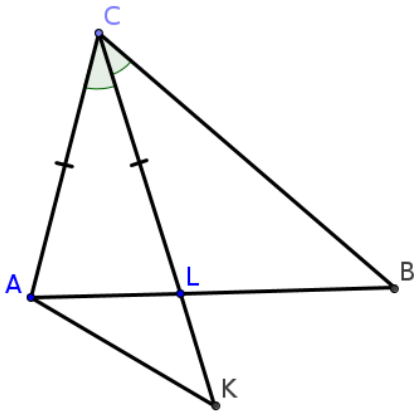


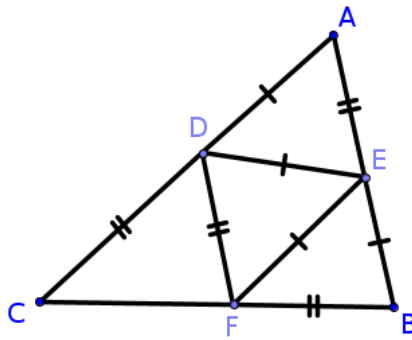
4. Разной по геометрии. 7 января

1.



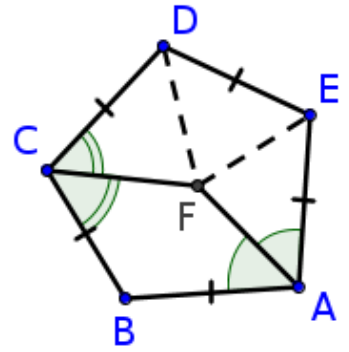
$\angle KAC + \angle BAC = 180^\circ$   
 (!)  $AK = BL$

2.



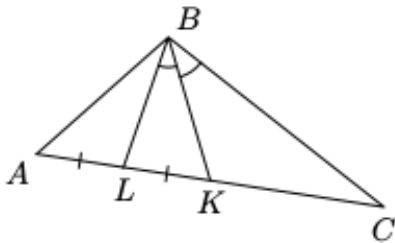
(!)  $CF = EB$

3.



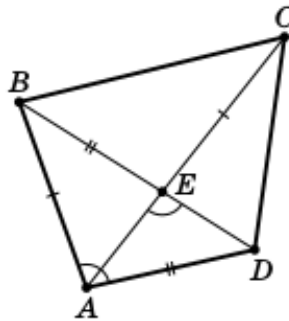
(!)  $FD = FE$

4.



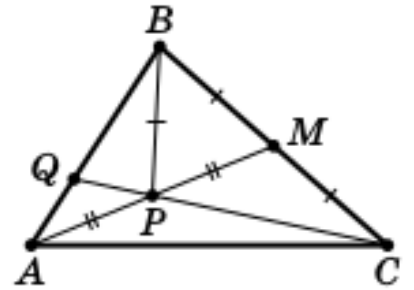
$BC = 2BL$   
 (!)  $AB = KC$

5.



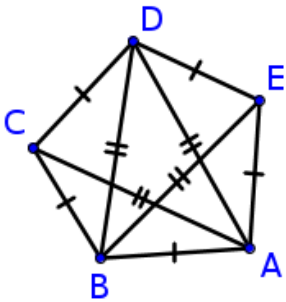
(!)  $BC > AD$

6.



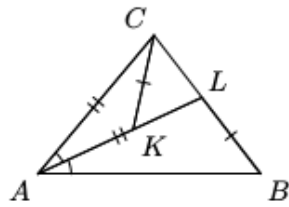
(!)  $AQ = QP$

7.



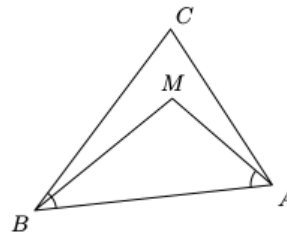
(!)  $CE = BD$

8.



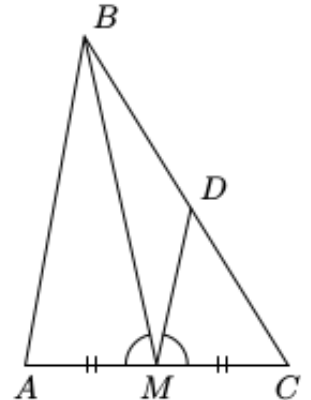
(!)  $\angle CKL = \angle ABC$

9.



$\angle AMB + \angle ACB = 180^\circ$   
 (!)  $BM = AC$

10.



$MB = MD + DC$   
 (!)  $\angle BAC = \angle ABM + \angle MCD$